

Additional Practise Sheet; Green's Functions and PDEs Completely voluntary.

If you want, we can discuss your solutions in the **Final Question Time of the semester**.
No extra points are awarded – the values are only meant as grade of difficulty here.

1. FROBENIUS' METHOD (6P): We will find a solution to the differential equation

$$4x f''(x) + 2(1-x)f'(x) - f(x) = 0 \text{ by Frobenius' ansatz } f(x) = x^\alpha \sum_{n=0}^{\infty} a_n x^n \quad a_0 \neq 0 .$$

- a) (2P) Show that the indicial equation dictates that $\alpha = 0$ or $\alpha = \frac{1}{2}$.
b) (4P) For the case $\alpha = 0$, derive the recurrence relation for the coefficients a_j and construct the closed answer.

Note: The case $\alpha = \frac{1}{2}$ is straight-forward and therefore boring. Do not do it.

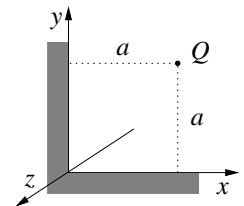
2. A TWO-DIMENSIONAL GREEN'S FUNCTION (4P per correct, independent way) Show that the Green's function to the *two*-dimensional Poisson equation “without boundaries at infinity” is

$$G(\vec{r}, \vec{r}') = \alpha \ln \frac{|\vec{r} - \vec{r}'|}{C} ,$$

where C is an arbitrary constant. Determine the constant α . There are several ways to do this problem, given the toolchest developed in the last semester. **Each correct way gives 4 points.**

You might want to recall also some Green's functions of one- and three-dimensional “empty” space.

3. IMAGE CHARGES AND GREEN'S FUNCTION FOR PLATES AT AN ANGLE (4P) A point charge q is located at $\vec{r}_0 = (a, a, 0)$ in front of two infinitely long, perfectly conducting, grounded plates which meet at the origin in an angle of 90° ; see figure for details. The problem is three-dimensional. Use the method of image charges (you need 3 images).



- a) (2P) Determine the potential everywhere.
b) (2P) Derive the induced surface charge density on the plates at $z = 0$. Sketch!

4. SPHERICAL HARMONICS (7P):

- a) (2P) Determine the parity of $Y_{lm}(\theta, \phi)$.
b) (3P) Inspired by a good book, prove the addition theorem for spherical harmonics:

$$P_l(\cos \alpha) = \frac{4\pi}{2l+1} \sum_{m=-l}^l Y_{lm}^*(\Omega) Y_{lm}(\Omega') = \sqrt{\frac{4\pi}{2l+1}} Y_{l0}(\alpha, 0) ,$$

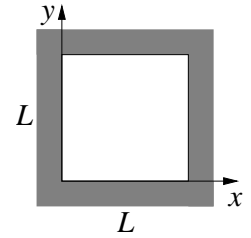
where α is the angle between (θ, ϕ) and (θ', ϕ') , i.e. $\cos \alpha = \cos \theta \cos \theta' + \sin \theta \sin \theta' \cos(\phi - \phi')$.

- c) (2P) Construct the first three Legendre polynomials from the generating function.

Please turn over.

5. SQUARE WITH BOUNDARY CONDITIONS IN ELECTROSTATICS (**8P**): The sides of a square (length of sides L) are made of some material such that the boundary conditions on the potential are

$$\Phi(x, y) = \begin{cases} \Phi_0 \sin \frac{3\pi x}{L} & \text{on the upper side, } y = L \\ 0 & \text{on all other sides.} \end{cases}$$



The problem is two-dimensional. There are no charges inside the square; see figure.

- (**1P**) Are these boundary condition of the Dirichlet or von-Neumann type?
- (**5P**) Determine the potential $\Phi(x, y)$ everywhere inside the square.

Hint: Show that you need to solve differential equations (you need to determine the constant of separation α):

$$\frac{d^2}{dx^2}X(x) = -\alpha^2 X(x) \quad , \quad \frac{d^2}{dy^2}Y(y) = \alpha^2 Y(y) \quad .$$

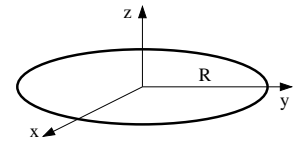
with the boundary conditions $X(x = 0) = 0 = X(x = L)$ and $Y(y = 0) = 0$.

Fail-safe point: $\Phi(x, y) \propto \sin \frac{3\pi x}{L} \left[e^{\frac{3\pi y}{L}} - e^{-\frac{3\pi y}{L}} \right]$.

- (**2P**) Using a pillbox construction, determine the charge density on the lower plate, $y = 0$.

6. LEGENDRE POLYNOMIALS (**2P**) Prove that $\int_{-1}^1 dx P_l(x) = 0$ for l a positive integer.

7. ELECTROSTATIC MULTIPOLE MOMENTS (**7P**): An infinitesimally thin, conducting, circular ring of radius R carries the homogeneous line charge density μ . It is centred at the origin in the xy plane, see figure.



Hints: Determine all spherical multipole moments with respect to the origin. If multipole moments vanish, you can substitute a calculation by a short argument.

Recall that $Y_{l0}(\theta, \phi) \propto P_l(\cos \theta)$, so that some results can also be written using Legendre polynomials at a given value, which you need to look up.

- (**1P**) Convince yourself that the charge density can take the form $\rho(r, \theta, \phi) = \frac{\mu}{r} \delta(r - R) \delta(\cos \theta)$.
Is this a Dirichlet or von-Neumann boundary problem?
- (**5P**) Determine all spherical multipole moments for $r \gg R$. Give explicit answers for the monopole, dipole and quadrupole moments.
- (**1P**) Determine the scalar potential far from the origin as expansion in a suitable, small parameter.
- (**3P**) Determine the scalar potential close to the origin as expansion in a suitable, small parameter.